

Name : \_\_\_\_\_

Score : \_\_\_\_\_

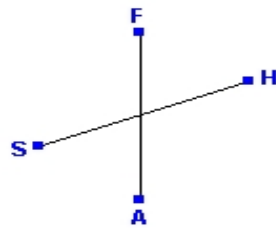
Teacher : \_\_\_\_\_

Date : \_\_\_\_\_

### Parallel Lines

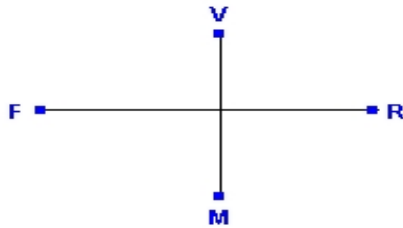
State whether the given pair of lines are parallel.

1)



Answer: \_\_\_\_\_

2)



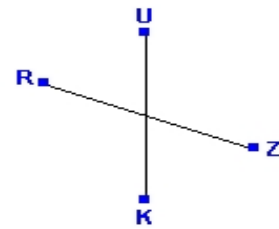
Answer: \_\_\_\_\_

3)



Answer: \_\_\_\_\_

4)



Answer: \_\_\_\_\_

5)



Answer: \_\_\_\_\_

6)



Answer: \_\_\_\_\_

