

Name : _____

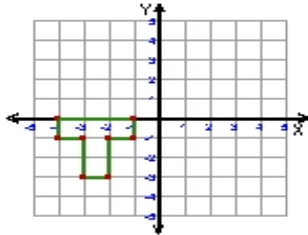
Score : _____

Teacher : _____

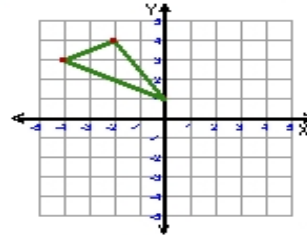
Date : _____

Reflections

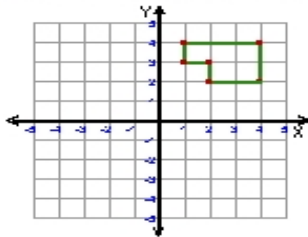
1) Reflection: Across Line $y = -x$



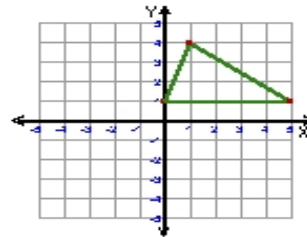
2) Reflection: Across Line $y = x$



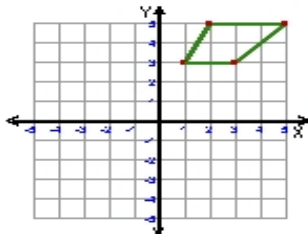
3) Reflection: Across the line $x = 1$



4) Reflection: Across the y-axis



5) Reflection: Across the line $y = 2$



6) Reflection: Across the x-axis

