

Geo/Maths - Lines Geometry


Name: _____

Parallel Lines and Transversals


Date: _____ Period: _____

Identify each pair of angles as corresponding, alternate interior, alternate exterior, or consecutive interior.


1a



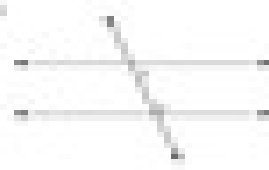
2a




3a




4a



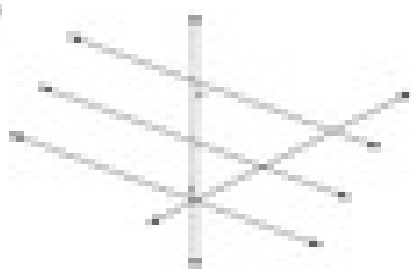
5a



6a



7a



8a

