




Name: _____

Name: _____

Angle Relationships

Date: _____ Period: _____

Name the relationship: complementary, supplementary, vertical, or adjacent.



Name the relationship: alternate exterior, corresponding, or alternate interior.

