







Name: _____

First guess how many shapes there are then count them.

 <p>How Many</p> <p>Count</p> <p><input type="text"/> <input type="text"/></p>	 <p>How Many</p> <p>Count</p> <p><input type="text"/> <input type="text"/></p>
 <p>How Many</p> <p>Count</p> <p><input type="text"/> <input type="text"/></p>	 <p>How Many</p> <p>Count</p> <p><input type="text"/> <input type="text"/></p>
 <p>How Many</p> <p>Count</p> <p><input type="text"/> <input type="text"/></p>	 <p>How Many</p> <p>Count</p> <p><input type="text"/> <input type="text"/></p>