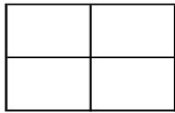
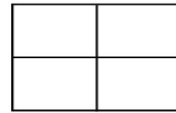


Modeling Fourths (A)

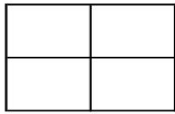
Instructions: Model the fraction by coloring or shading. Try coloring similar fractions in different ways.



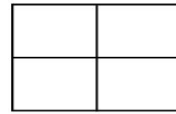
$$\frac{1}{4}$$



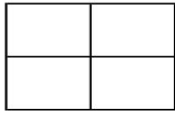
$$\frac{3}{4}$$



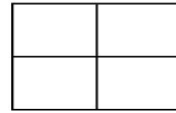
$$\frac{3}{4}$$



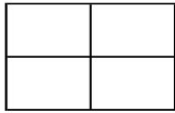
$$\frac{3}{4}$$



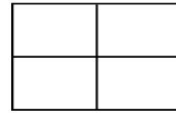
$$\frac{2}{4}$$



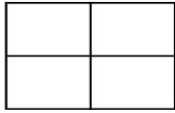
$$\frac{3}{4}$$



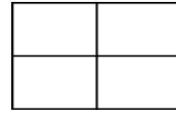
$$\frac{2}{4}$$



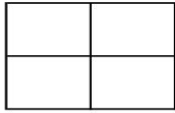
$$\frac{3}{4}$$



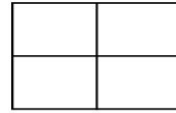
$$\frac{1}{4}$$



$$\frac{2}{4}$$



$$\frac{4}{4}$$



$$\frac{2}{4}$$