

Name: \_\_\_\_\_ Date: \_\_\_\_\_ Number: \_\_\_\_\_

# Everyday Math Unit 4 Review

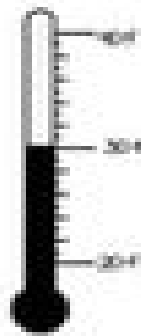
1. How much money do you have?

Q Q N N P = \_\_\_\_\_


Q D D N P P = \_\_\_\_\_

Q Q Q D P = \_\_\_\_\_

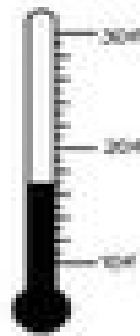
2. Write the temperature for each thermometer on the line below.



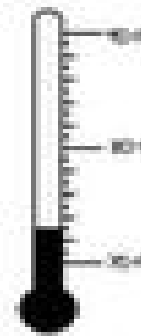
\_\_\_\_\_



\_\_\_\_\_



\_\_\_\_\_

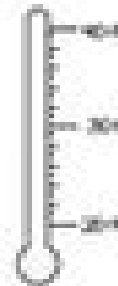


\_\_\_\_\_

3. Fill in the thermometer to show the correct temperature.



63°F



26°F