

Name \_\_\_\_\_

Date \_\_\_\_\_

# ELEMENTS, COMPOUNDS, AND MIXTURES

Classify each of the pictures below by placing the correct label in the blanks below:

A = Element

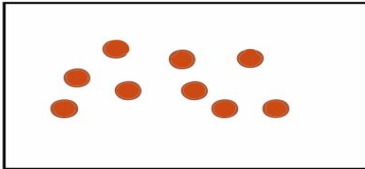
B = Compound

C = Mixture of elements

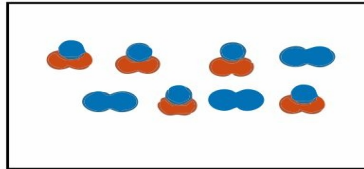
D = Mixture of compounds

E = Mixture of elements and compounds

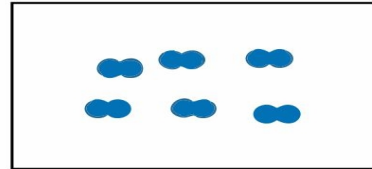
Each circle represents an atom and each different color represents a different kind of atom. If two atoms are touching then they are bonded together.



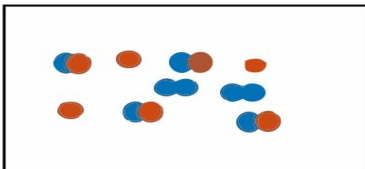
1) \_\_\_\_\_



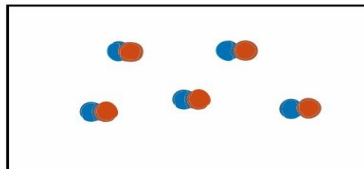
2) \_\_\_\_\_



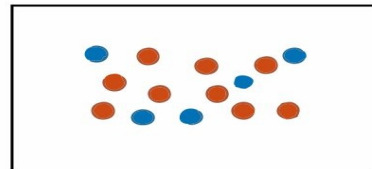
3) \_\_\_\_\_



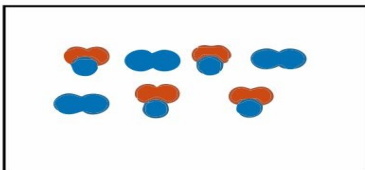
4) \_\_\_\_\_



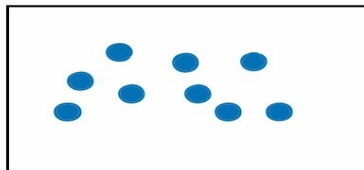
5) \_\_\_\_\_



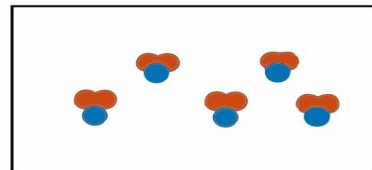
6) \_\_\_\_\_




7) \_\_\_\_\_



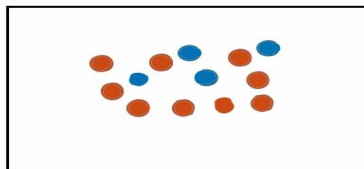
8) \_\_\_\_\_



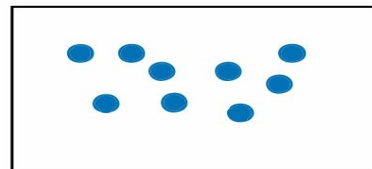
9) \_\_\_\_\_



10) \_\_\_\_\_



11) \_\_\_\_\_



12) \_\_\_\_\_