


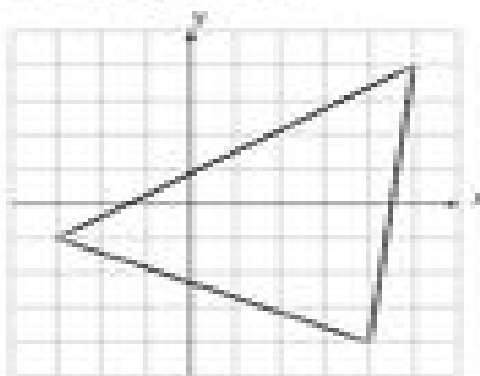
Dilations (A)

Draw the dilated image.

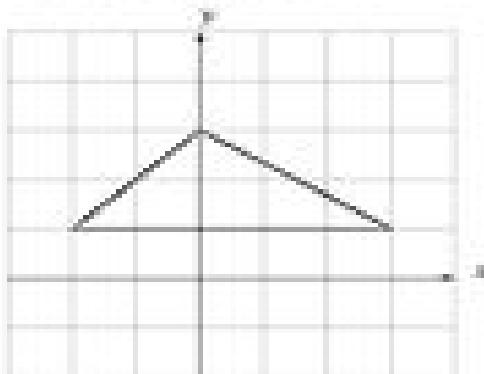
Dilate by 2 using center $(0, 0)$.



Dilate by $\frac{1}{2}$ using center $(0, 0)$.



Dilate by $\frac{1}{2}$ using center $(0, 0)$.



Dilate by 2 using center $(0, 0)$.

