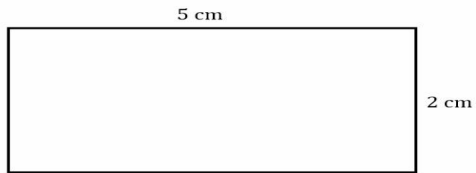


Name _____ **answer key**

Date _____

AREA AND PERIMETER

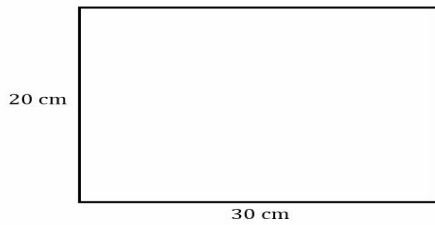
Calculate each shapes for its area and perimeter.



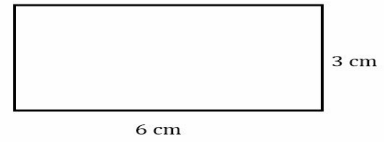
Area = **10** cm²
Perimeter = **14** cm



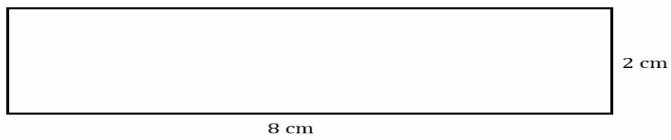
Area = **16** cm²
Perimeter = **16** cm



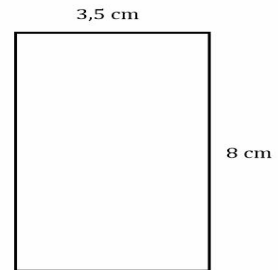
Area = **600** cm²
Perimeter = **100** cm



Area = **18** cm²
Perimeter = **18** cm



Area = **16** cm²
Perimeter = **20** cm



Area = **28** cm²
Perimeter = **23** cm