

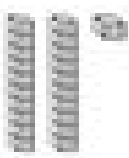
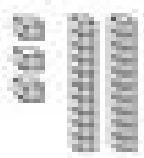



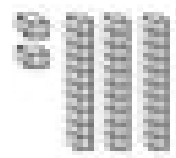









1.NBT.B.3

Name: _____

Comparing Numbers I



Write how many tens and ones. Compare the numbers. Write greater than, less than, or equal.

	<table border="1"><thead><tr><th>Tens</th><th>Ones</th></tr></thead><tbody><tr><td> </td><td> </td></tr></tbody></table>	Tens	Ones				<table border="1"><thead><tr><th>Tens</th><th>Ones</th></tr></thead><tbody><tr><td> </td><td> </td></tr></tbody></table>	Tens	Ones			
Tens	Ones											
Tens	Ones											
	<table border="1"><thead><tr><th>Tens</th><th>Ones</th></tr></thead><tbody><tr><td> </td><td> </td></tr></tbody></table>	Tens	Ones				<table border="1"><thead><tr><th>Tens</th><th>Ones</th></tr></thead><tbody><tr><td> </td><td> </td></tr></tbody></table>	Tens	Ones			
Tens	Ones											
Tens	Ones											
	<table border="1"><thead><tr><th>Tens</th><th>Ones</th></tr></thead><tbody><tr><td> </td><td> </td></tr></tbody></table>	Tens	Ones				<table border="1"><thead><tr><th>Tens</th><th>Ones</th></tr></thead><tbody><tr><td> </td><td> </td></tr></tbody></table>	Tens	Ones			
Tens	Ones											
Tens	Ones											
	<table border="1"><thead><tr><th>Tens</th><th>Ones</th></tr></thead><tbody><tr><td> </td><td> </td></tr></tbody></table>	Tens	Ones				<table border="1"><thead><tr><th>Tens</th><th>Ones</th></tr></thead><tbody><tr><td> </td><td> </td></tr></tbody></table>	Tens	Ones			
Tens	Ones											
Tens	Ones											
	<table border="1"><thead><tr><th>Tens</th><th>Ones</th></tr></thead><tbody><tr><td> </td><td> </td></tr></tbody></table>	Tens	Ones				<table border="1"><thead><tr><th>Tens</th><th>Ones</th></tr></thead><tbody><tr><td> </td><td> </td></tr></tbody></table>	Tens	Ones			
Tens	Ones											
Tens	Ones											