

Name : _____

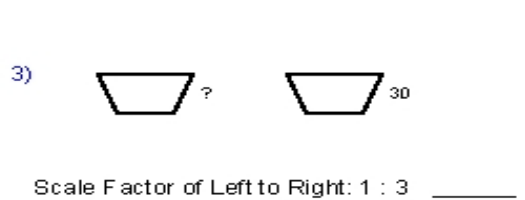
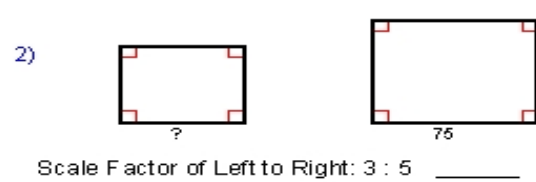
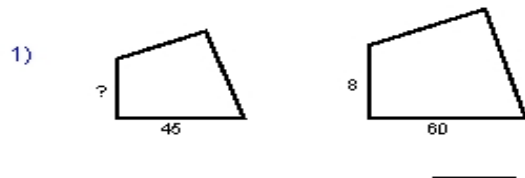
Score : _____

Teacher : _____

Date : _____

Using Similar Polygons

Each polygon pair is similar. Find the missing side length.



Given each polygon pair is similar, find x.

