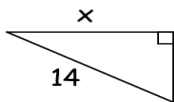


**Trig Ratios Worksheet**  
**"Solving Right Triangles"**

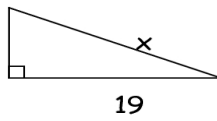
Name \_\_\_\_\_

Find all segments to the nearest tenth, and angles to the nearest degree. Solve for  $x$  in each problem.

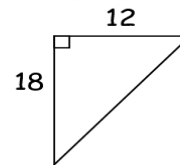
1. \_\_\_\_\_



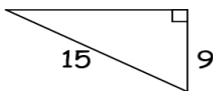
2. \_\_\_\_\_



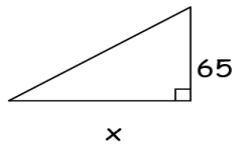
3. \_\_\_\_\_



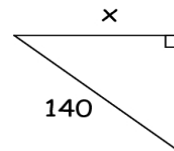
4. \_\_\_\_\_



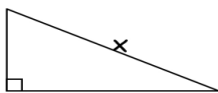
5. \_\_\_\_\_



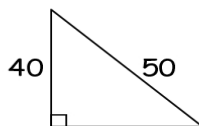
6. \_\_\_\_\_



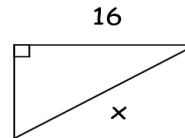
7. \_\_\_\_\_



8. \_\_\_\_\_



9. \_\_\_\_\_



10. \_\_\_\_\_

