

Name : _____

Score : _____

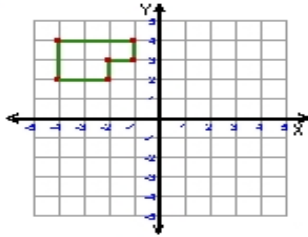
Teacher : _____

Date : _____

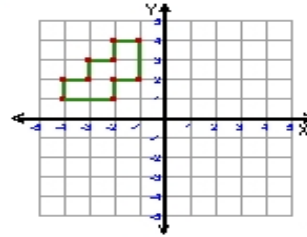
Transformations

ccw = counterclockwise

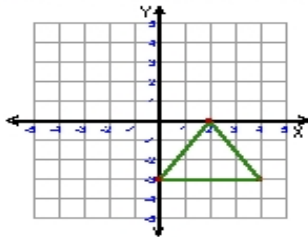
- 1) Reflection: Across the x-axis



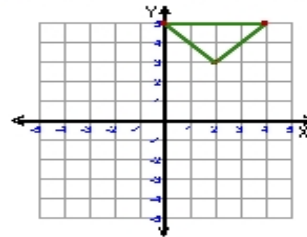
- 2) Rotation: 90° clockwise about the origin



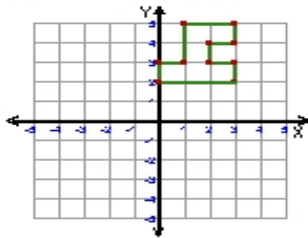
- 3) Reflection: Across the line $y = -1$



- 4) Translation: 2 left and 3 down



- 5) Translation: 5 down



- 6) Rotation: 90° ccw about the origin

