






Name _____

Temperature
Comparing temperature

Highs and Lows

Write each temperature.



A. _____°F

B. _____°F

C. _____°F

D. _____°F

E. _____°F

Write warmer or cooler on each line to make the sentences true.

1. Temperature D is _____ than temperature C.
2. Temperature E is _____ than temperature B.
3. Temperature B is _____ than temperature A.
4. Temperature C is _____ than temperature B.
5. Temperature A is _____ than temperature C but _____ than temperature E.
6. Temperature E is _____ than temperature B but _____ than temperature A.
7. Temperature D is _____ than temperature E and _____ than temperature A.
8. Temperature A is _____ than temperature D and _____ than temperature C.

Review Use the temperatures from warmest to coolest.

© The McGraw-Hill Companies, Inc.