










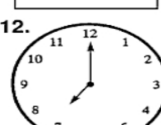


Name: _____

Telling Time Practice

Directions: Write the time on each clock in the box below.

| | | | |
|---|--|--|---|
| 1.  <input type="text"/> | 2.  <input type="text"/> | 3.  <input type="text"/> | 4.  <input type="text"/> |
| 5.  <input type="text"/> | 6.  <input type="text"/> | 7.  <input type="text"/> | 8.  <input type="text"/> |
| 9.  <input type="text"/> | 10.  <input type="text"/> | 11.  <input type="text"/> | 12.  <input type="text"/> |