

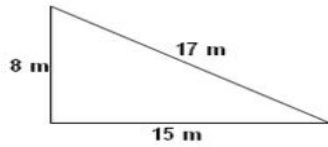
Student Name: _____

Score: _____

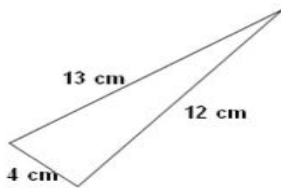
Is it Right Angled Triangle?

Check whether the given triangles are right angled triangle using Pythagorean rule:

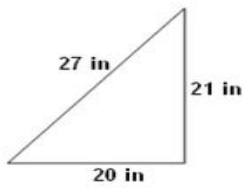
Work Space



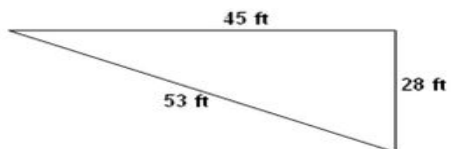
Answer:



Answer:



Answer:



Answer: