

Name : _____

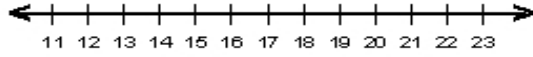
Score : _____

Teacher : _____

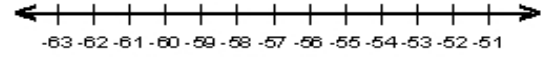
Date : _____

Solve the Inequalities

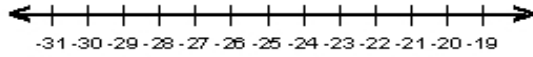
1) $\frac{x}{3} \geq 5$



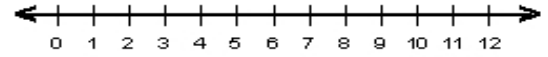
6) $-8 > \frac{s}{7}$



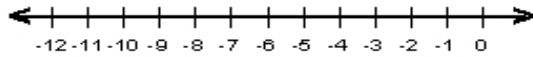
2) $-13 < \frac{y}{2}$



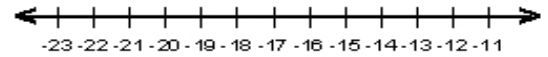
7) $7n > 42$



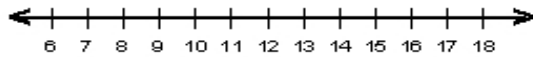
3) $-4b \geq 28$



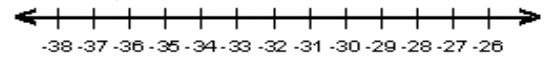
8) $91 \leq -7q$



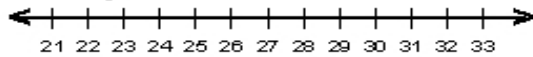
4) $52 \geq 4d$



9) $\frac{v}{4} \geq -8$



5) $\frac{h}{3} < 10$



10) $-11 < \frac{k}{4}$

