










How many do you count?

	1	2	3	4	5
	6	7	8	9	10
	1	2	3	4	5
	6	7	8	9	10
	1	2	3	4	5
	6	7	8	9	10
	1	2	3	4	5
	6	7	8	9	10
	1	2	3	4	5
	6	7	8	9	10
	1	2	3	4	5
	6	7	8	9	10