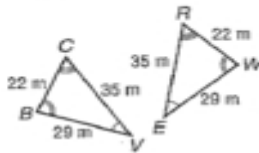


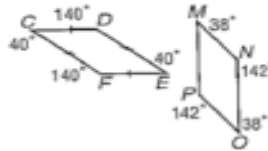
**6-5****Practice: Skills****Congruent Polygons**

Determine whether the polygons shown are congruent. If so, name the corresponding parts and write a congruence statement.

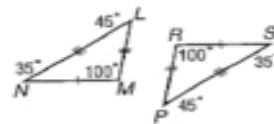
1.



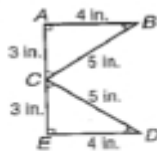
2.



3.



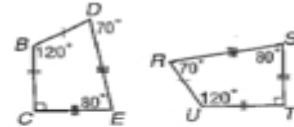
4.



5.



6.



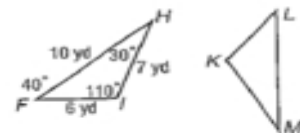
In the figure,  $\triangle HFI \cong \triangle MLK$ . Find each measure.

7.  $m\angle M$

8.  $ML$

9.  $m\angle K$

10.  $KM$



In the figure, quadrilateral  $ACDB \cong$  quadrilateral  $EFGH$ . Find each measure.

11.  $m\angle H$

12.  $EF$

13.  $m\angle F$

14.  $HG$

