
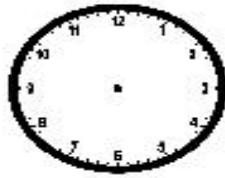


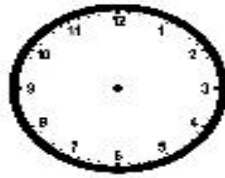
Review: (3.MD.1) Draw the time to the next minute.



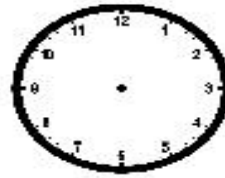
12:37



3:24



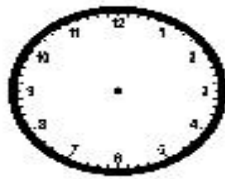
4:32



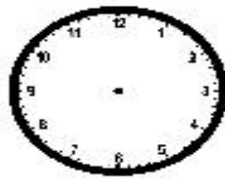
10:01



6:03



2:12



7:35



9:41

Review: (2.NB.T.3) Complete the Chart.

Number Word	Number	Expanded Form	Model
nine hundred eighty-three			
		$700 + 30 + 8$	