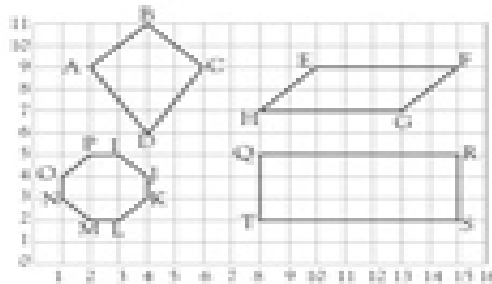
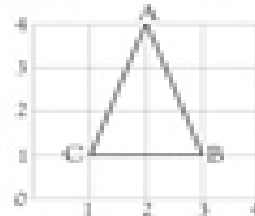




Coordinates

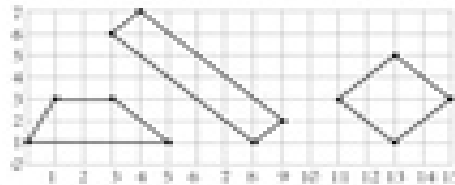
Write the coordinates of:

- A
- B
- C



Write the coordinates of:

- | | | | | |
|------------------------|------------------------|------------------------|------------------------|------------------------|
| A <input type="text"/> | B <input type="text"/> | C <input type="text"/> | D <input type="text"/> | E <input type="text"/> |
| F <input type="text"/> | G <input type="text"/> | H <input type="text"/> | I <input type="text"/> | J <input type="text"/> |
| K <input type="text"/> | L <input type="text"/> | M <input type="text"/> | N <input type="text"/> | O <input type="text"/> |
| P <input type="text"/> | Q <input type="text"/> | R <input type="text"/> | S <input type="text"/> | T <input type="text"/> |



Plot these points on the grid, and connect them up in the right order. (0, 1) (1, 3) (3, 3) (5, 1) (0, 1). What shape does this make?

(3, 6) (4, 7) (9, 2) (8, 1) (3, 6). What shape does this make?

(11, 3) (13, 5) (15, 5) (13, 1) (11, 3). What shape does this make?