


Fraction models



Write the missing numbers to show what part is shaded.



$\frac{\text{shaded part}}{\text{all parts}} = \frac{3}{4}$



$\frac{5}{6} = 5$ and $\frac{5}{6} = \frac{5}{6}$
So, shaded part = $5 \frac{5}{6}$

Write the missing numbers to show what part is shaded.



$\frac{7}{10}$



$\frac{2}{3}$



$\frac{5}{8}$



$\frac{9}{12}$


Write the fraction for the part that is shaded.



$\frac{8}{10}$



$\frac{4}{6}$



$\frac{7}{9}$


Write the fraction for the part that is shaded.



$\frac{5}{8} + \frac{3}{8}$



$\frac{6}{8} + \frac{4}{8} + \frac{2}{8}$



$\frac{7}{8} + \frac{5}{8}$