








Name: _____

Subtracting Larger Numbers

Directions: Subtract the following numbers. Color the star if you subtracted correctly.

1.  $\begin{array}{r} 245 \\ - 40 \\ \hline \end{array}$	6.  $\begin{array}{r} 679 \\ - 453 \\ \hline \end{array}$
2.  $\begin{array}{r} 1,724 \\ - 503 \\ \hline \end{array}$	7.  $\begin{array}{r} 2,291 \\ - 1,270 \\ \hline \end{array}$
3.  $\begin{array}{r} 4,728 \\ - 24 \\ \hline \end{array}$	8.  $\begin{array}{r} 8,545 \\ - 5,325 \\ \hline \end{array}$
4.  $\begin{array}{r} 9,385 \\ - 3,073 \\ \hline \end{array}$	9.  $\begin{array}{r} 8,773 \\ - 6,352 \\ \hline \end{array}$
5.  $\begin{array}{r} 4,284 \\ - 2,163 \\ \hline \end{array}$	10.  $\begin{array}{r} 5,392 \\ - 3,072 \\ \hline \end{array}$