


ADDiNG MiNUTES

Read the clock and add or subtract time!

Name _____

Date _____

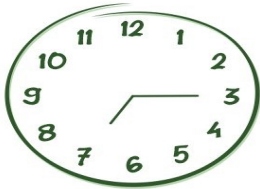


What time is on the clock?

What time will it be in 2 hours?

What time was it 1 hour and 10 minutes ago?

What time will it be in 3 hours and 15 minutes?




What time is on the clock?

What time will it be in 2 hours and 30 minutes?

What time was it 35 minutes ago?

What time will it be in 15 minutes?




What time is on the clock?

What time will it be in 3 hours and 5 minutes?

What time was it 45 minutes ago?

What time will it be in 2 hours and 20 minutes?



What time is on the clock?

What time will it be in 6 hours?

What time was it 3 hours and 30 minutes ago?

What time will it be in 2 hours and 40 minutes?
