



Name \_\_\_\_\_

# Adding Tens and Ones!


Directions: Add the tens and the ones to find how many.




$$\underline{\quad} + \underline{\quad} = \square$$



$$\underline{\quad} + \underline{\quad} = \square$$



$$\underline{\quad} + \underline{\quad} = \square$$



$$\underline{\quad} + \underline{\quad} = \square$$