

Name _____

Equivalent Number Forms



Ten Frames

Dinosaur's Dots



Circle.


12



3

7


17



10

13

15



8

10

18

Write.

















Bonus: Copy the numbers. Draw ten frames to match.

5

13

17