


Name \_\_\_\_\_ (Time)

Time to the hour and half-hour


### Time to Measure

Write the time shown on each clock.

For each time you write, color the measuring cup with the matching time.



A. \_\_\_\_\_




B. \_\_\_\_\_




C. \_\_\_\_\_



D. \_\_\_\_\_



E. \_\_\_\_\_




F. \_\_\_\_\_




G. \_\_\_\_\_




H. \_\_\_\_\_



I. \_\_\_\_\_



J. \_\_\_\_\_



K. \_\_\_\_\_



L. \_\_\_\_\_



M. \_\_\_\_\_



N. \_\_\_\_\_

