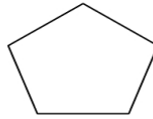
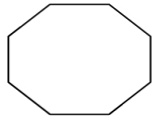
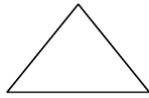
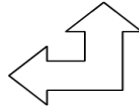
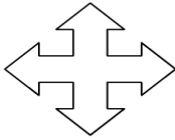
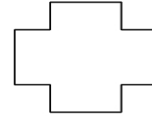
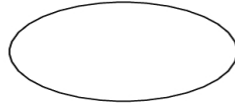
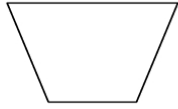


ROTATIONAL SYMMETRY

A shape has rotational symmetry if it fits onto itself two or more times in one turn.
The order of rotational symmetry is the number of times the shape fits onto itself in one turn.
A 2D shape has a line of symmetry if the line divides the shape into two halves – one being the mirror image of the other.

Write the order of rotational symmetry under each shape & letter. Also draw dotted lines to indicate lines of symmetry.



M A T H S