

Name : _____

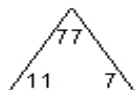
Score : _____

Teacher : _____

Date : _____

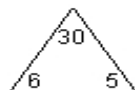
Complete Each Family of Facts

1)



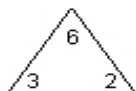
$$\begin{array}{rclcl} \square & \times & \square & = & \square \\ \square & \times & \square & = & \square \\ \square & \div & \square & = & \square \\ \square & \div & \square & = & \square \end{array}$$

4)



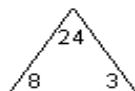
$$\begin{array}{rclcl} \square & \times & \square & = & \square \\ \square & \times & \square & = & \square \\ \square & \div & \square & = & \square \\ \square & \div & \square & = & \square \end{array}$$

2)



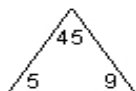
$$\begin{array}{rclcl} \square & \times & \square & = & \square \\ \square & \times & \square & = & \square \\ \square & \div & \square & = & \square \\ \square & \div & \square & = & \square \end{array}$$

5)



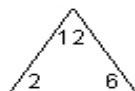
$$\begin{array}{rclcl} \square & \times & \square & = & \square \\ \square & \times & \square & = & \square \\ \square & \div & \square & = & \square \\ \square & \div & \square & = & \square \end{array}$$

3)



$$\begin{array}{rclcl} \square & \times & \square & = & \square \\ \square & \times & \square & = & \square \\ \square & \div & \square & = & \square \\ \square & \div & \square & = & \square \end{array}$$

6)



$$\begin{array}{rclcl} \square & \times & \square & = & \square \\ \square & \times & \square & = & \square \\ \square & \div & \square & = & \square \\ \square & \div & \square & = & \square \end{array}$$

