

Name _____
Date _____

Reading a Metric Ruler

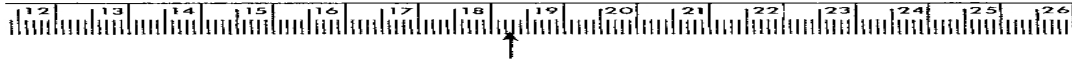
Rules for reading any instrument:

The precision of the instrument determines the number of significant figures in the measurement. Ordinarily, the instrument should be read to its limit. The last figure in any measurement is doubtful.


On these metric rulers, the estimate is between the millimeter lines.

The numbered lines represent centimeter lines.

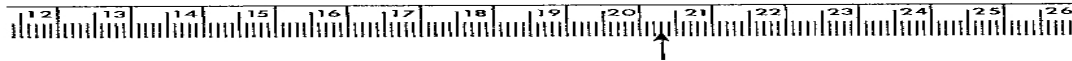
Directions: Read each of these metric rulers to its limit.



How many: 1. _____ cm? 2. _____ mm? 3. _____ m?



How many: 4. _____ km? 5. _____ mm? 6. _____ cm?



How many: 7. _____ m? 8. _____ cm? 9. _____ km?

(continued)