





More _____
10 More, 10 Less
1 More, 1 Less



Cupcakes

Directions: Fill in the missing numbers. Count by 10's going down. Count by 1's going across.


12	13	



		57
	66	




	70	
	80	



	39	
48		



32		
	43	



	27	
	47	



	82	83

	49	
		60

