

Fractions & Decimals

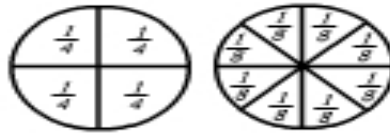
Name: _____

Finding equivalence between quarters & eighths.



A whole can be divided into equal parts -

4 quarters

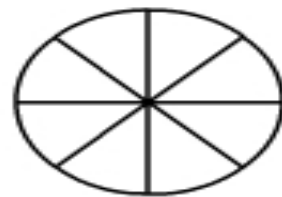
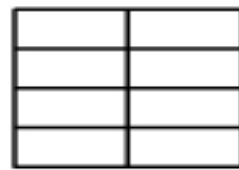
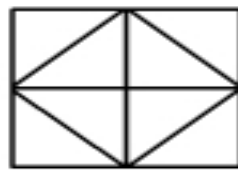
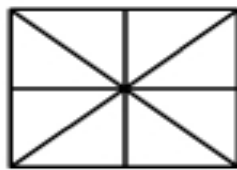
8 eighths.



Colour one quarter of each of these squares:



Colour one quarter of each of these squares:



1 whole is equal to _____ eighths.

1 whole is equal to _____ quarters.

_____ quarters is the same as 1 quarter.

_____ eighths is the same as 1 half.

_____ eighths is the same as 3 quarters.