



Name: \_\_\_\_\_

Compare each set of fraction ice cream cones using the <, >, and = symbols.


1.




2.




3.



4.




5.



6.




7.



8.




9.



10.



11.



12.

