

Name: _____

Date: _____


Elapsed Time Clock Worksheet



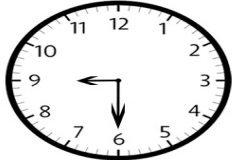
Work out the elapsed time between the times on the two clocks




To



_____ minutes




To



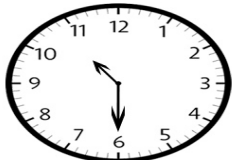
_____ minutes




To



_____ minutes



To



_____ minutes



To



_____ minutes