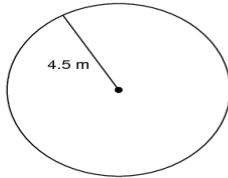


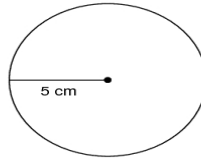
Circles

Find the circumference of each circle. Round to the nearest tenth.

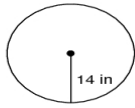
1)



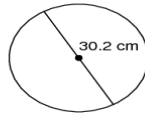
2)



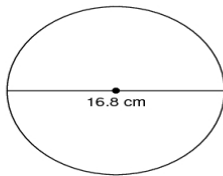
3)



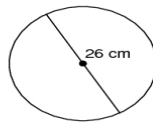
4)



5)



6)



7) radius = 12 yd

8) radius = 5.5 mi