


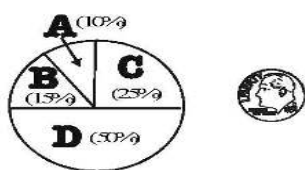
Graph

(Day #1)

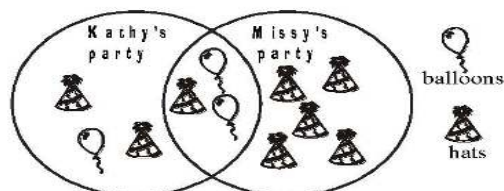


***Refer to the blank graph.

- A.** Which information will you find on line “A”?
- title of the graph
 - horizontal axis label
 - vertical axis label
 - appropriate and consistent scale units
- B.** If the x-axis lists the names of the cereals, what information will be on the y-axis?
- C.** If the y-axis lists the numbers of students that were surveyed, what number will the list begin with?
- D.** dime : dollar :: (Which section of the pie?): whole pie



- E.** How many party hats did Kathy have at her party?



- * A, B, & E
 ** A, B, & D
 *** A, C, & E