

Print Worksheet

Name: \_\_\_\_\_

Date: \_\_\_\_\_

Convert each container's capacity milliliters.



0.75L

\_\_\_\_\_ mL



1 quart

\_\_\_\_\_ mL



0.25L

\_\_\_\_\_ mL



5 pints

\_\_\_\_\_ mL

Convert each container's capacity to liters.

1 pint



\_\_\_\_\_ L



\_\_\_\_\_ L

250mL



\_\_\_\_\_ L

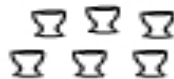
5 quarts



\_\_\_\_\_ L

Total Volume

Calculate the total volume these of containers.



25mL each



5100mL

3  
gallons

total volume =

\_\_\_\_\_ mL

Calculating Volume

4in



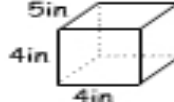
6in

7in

volume =

\_\_\_\_\_ in<sup>3</sup>

5in



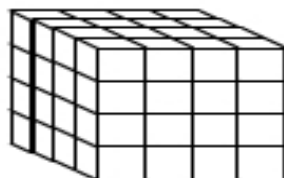
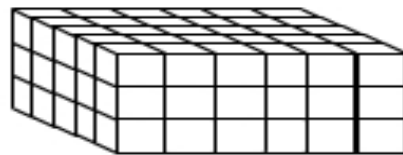
4in

4in

volume =

\_\_\_\_\_ in<sup>3</sup>

Volume of 3D Stacks

= 1 cm<sup>3</sup>volume =  
\_\_\_\_\_ cm<sup>3</sup>volume =  
\_\_\_\_\_ cm<sup>3</sup>