

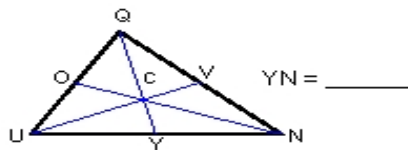
Name : _____ Score : _____

Teacher : _____ Date : _____

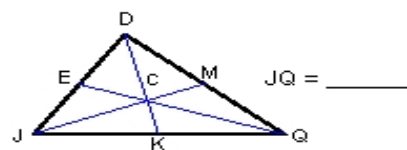
Triangle Medians

Each triangle shows all three of its medians drawn.

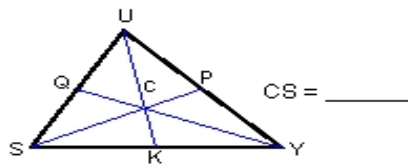
1) Find YN if UN = 10.



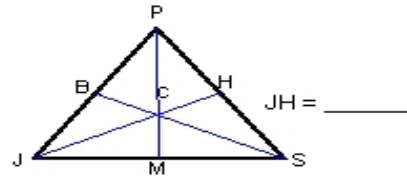
2) Find JQ if KQ = 16.



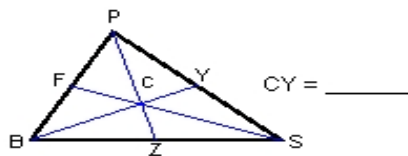
3) SP = 18. Find CS.



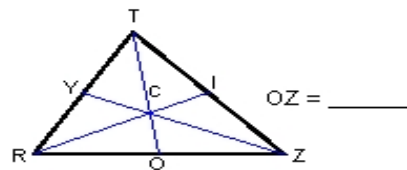
4) CH = 17. Find JH.



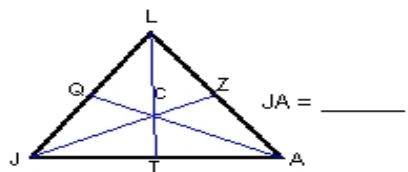
5) BY = 51. Find CY.



6) Find OZ if RZ = 14.



7) Find JA if TA = 12.



8) HA = 12. Find CH.

