



Two-Step Transformations (B)

Directions: Transform each triangle below using the instructions in the order given. Draw and label each transformation.


Problem 1
Triangle A



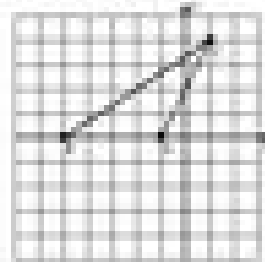
Problem 2
Triangle B




Problem 3
Triangle C



Problem 4
Triangle D



Problem 5
Triangle E



Problem 6
Triangle F

