



# What's the angle? .....

1. Name each angle


2. Measure these angles using a protractor. The first one is done for you.




a 90°  
Right angle



b \_\_\_\_\_  
\_\_\_\_\_




c \_\_\_\_\_  
\_\_\_\_\_



d \_\_\_\_\_  
\_\_\_\_\_



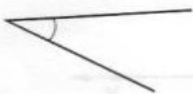
e \_\_\_\_\_  
\_\_\_\_\_



f \_\_\_\_\_  
\_\_\_\_\_



g \_\_\_\_\_  
\_\_\_\_\_




h \_\_\_\_\_  
\_\_\_\_\_



i \_\_\_\_\_  
\_\_\_\_\_



j \_\_\_\_\_  
\_\_\_\_\_



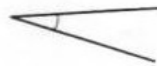
k \_\_\_\_\_  
\_\_\_\_\_



l \_\_\_\_\_  
\_\_\_\_\_



m \_\_\_\_\_  
\_\_\_\_\_



n \_\_\_\_\_  
\_\_\_\_\_



o \_\_\_\_\_  
\_\_\_\_\_