


Geometry - Extra Practice Pages Name: _____

A polygon is a closed shape with straight sides.


pentagon rhombus decagon trapezoid square
hexagon decagon octagon triangle



Name: _____
Number of Sides: _____




Name: _____
Number of Sides: _____



Name: _____
Number of Sides: _____



Name: _____
Number of Sides: _____



Name: _____
Number of Sides: _____



Name: _____
Number of Sides: _____



Name: _____
Number of Sides: _____

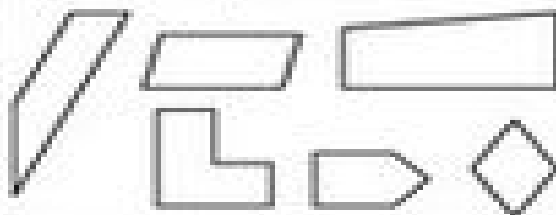


Name: _____
Number of Sides: _____



Name: _____
Number of Sides: _____

Quadrilaterals have 4 sides.
Color all the quadrilaterals.



Write whether each is a point, line, line segment, or ray.

