


Geometry - Extra Practice Pages Name: \_\_\_\_\_

A polygon is a closed shape with straight sides.


pentagon rhombus decagon trapezoid square  
hexagon decagon octagon triangle



Name: \_\_\_\_\_  
Number of Sides: \_\_\_\_\_




Name: \_\_\_\_\_  
Number of Sides: \_\_\_\_\_




Name: \_\_\_\_\_  
Number of Sides: \_\_\_\_\_



Name: \_\_\_\_\_  
Number of Sides: \_\_\_\_\_



Name: \_\_\_\_\_  
Number of Sides: \_\_\_\_\_



Name: \_\_\_\_\_  
Number of Sides: \_\_\_\_\_



Name: \_\_\_\_\_  
Number of Sides: \_\_\_\_\_

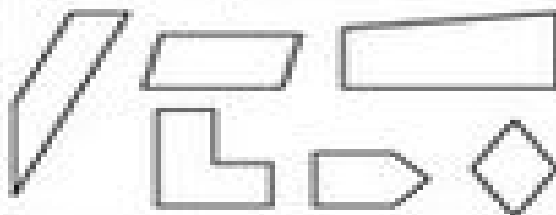


Name: \_\_\_\_\_  
Number of Sides: \_\_\_\_\_



Name: \_\_\_\_\_  
Number of Sides: \_\_\_\_\_

Quadrilaterals have 4 sides.  
Color all the quadrilaterals.



Write whether each is a point, line, line segment, or ray.




\_\_\_\_\_



\_\_\_\_\_



\_\_\_\_\_



\_\_\_\_\_