

Name : _____

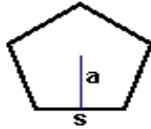
Score : _____

Teacher : _____

Date : _____

Identify and Calculate the Area and Perimeter for each Polygon.

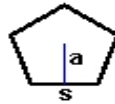
1)



$s = 6.8 \text{ mm}$
 $a = 3.23 \text{ mm}$

Area: _____
Perimeter: _____
Type: _____

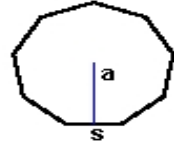
2)



$s = 5.1 \text{ ft}$
 $a = 2.43 \text{ ft}$

Area: _____
Perimeter: _____
Type: _____

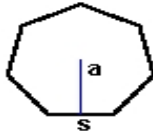
3)



$s = 3.3 \text{ ft}$
 $a = 1.65 \text{ ft}$

Area: _____
Perimeter: _____
Type: _____

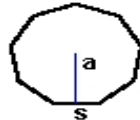
4)



$s = 3.1 \text{ yds}$
 $a = 1.55 \text{ yds}$

Area: _____
Perimeter: _____
Type: _____

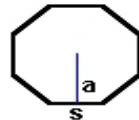
5)



$s = 2.7 \text{ inches}$
 $a = 1.35 \text{ inches}$

Area: _____
Perimeter: _____
Type: _____

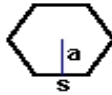
6)



$s = 6 \text{ mm}$
 $a = 2.6 \text{ mm}$

Area: _____
Perimeter: _____
Type: _____

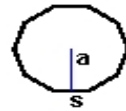
7)



$s = 5 \text{ yds}$
 $a = 2.5 \text{ yds}$

Area: _____
Perimeter: _____
Type: _____

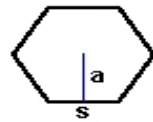
8)



$s = 2.4 \text{ cm}$
 $a = 1.2 \text{ cm}$

Area: _____
Perimeter: _____
Type: _____

9)



$s = 6.7 \text{ inches}$
 $a = 3.35 \text{ inches}$

Area: _____
Perimeter: _____
Type: _____