



# 2 Times Table Worksheet

Name: \_\_\_\_\_

Date: \_\_\_\_\_


Count in 2s and colour in the grid.


1	2	3	4	5
6	7	8	9	10
11	12	13	14	15
16	17	18	19	20
21	22	23	24	25


## Questions

- a)  $1 \times 2 =$  \_\_\_\_\_
- b)  $2 \times 2 =$  \_\_\_\_\_
- c)  $3 \times 2 =$  \_\_\_\_\_
- d)  $4 \times 2 =$  \_\_\_\_\_
- e)  $5 \times 2 =$  \_\_\_\_\_
- f)  $6 \times 2 =$  \_\_\_\_\_
- g)  $7 \times 2 =$  \_\_\_\_\_
- h)  $8 \times 2 =$  \_\_\_\_\_
- i)  $9 \times 2 =$  \_\_\_\_\_
- j)  $10 \times 2 =$  \_\_\_\_\_

How many sets of ears are there?

a)  \_\_\_\_\_ x \_\_\_\_\_ = \_\_\_\_\_

b)  \_\_\_\_\_ x \_\_\_\_\_ = \_\_\_\_\_

c)  \_\_\_\_\_ x \_\_\_\_\_ = \_\_\_\_\_