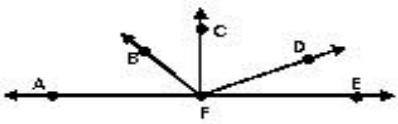
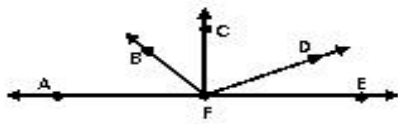
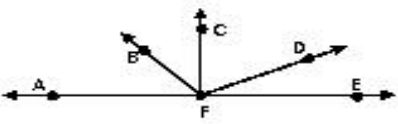
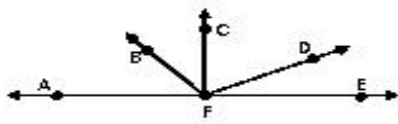
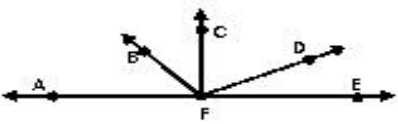
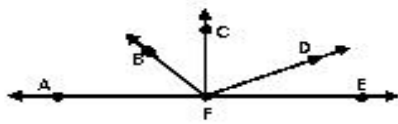
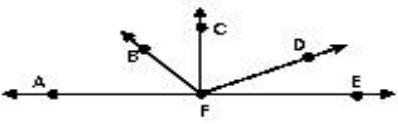
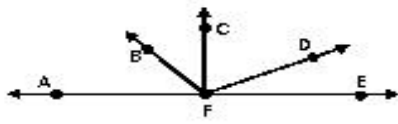


Partner Paper

Names: _____

Measure each angle and classify it as right, acute, straight, or obtuse.

 <p>$m\angle AFB = \underline{\hspace{2cm}}$</p>	 <p>$m\angle DFE = \underline{\hspace{2cm}}$</p>
 <p>$m\angle AFD = \underline{\hspace{2cm}}$</p>	 <p>$m\angle BFE = \underline{\hspace{2cm}}$</p>
 <p>$m\angle CFB = \underline{\hspace{2cm}}$</p>	 <p>$m\angle AFE = \underline{\hspace{2cm}}$</p>
 <p>$m\angle BFD = \underline{\hspace{2cm}}$</p>	 <p>$m\angle CFE = \underline{\hspace{2cm}}$</p>