



Name _____




How many Snowballs?



Jill and Tom are having a snowball fight. Jill has 3 more snowballs than Tom. Jill has 7 snowballs. How many snowballs does Tom have?

Draw a picture.

Use a number line.



Write the equation.

_____ - _____ = _____

Write the answer.

_____ Snowballs