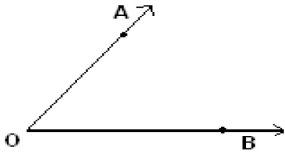
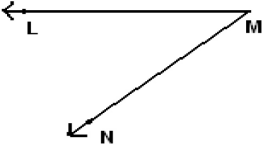

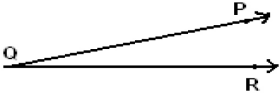

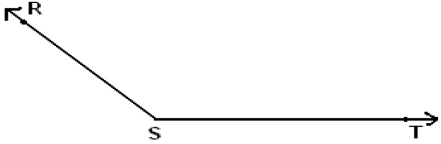
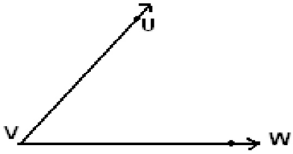
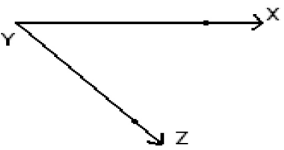


Student Name: _____

Score: _____

Vertex and Sides Formed by Angles

Name the vertex and sides formed by the angles:

| | |
|---|--|
|  <p>Vertex: _____ Sides: _____</p> |  <p>Vertex: _____ Sides: _____</p> |
|  <p>Vertex: _____ Sides: _____</p> |  <p>Vertex: _____ Sides: _____</p> |
|  <p>Vertex: _____ Sides: _____</p> |  <p>Vertex: _____ Sides: _____</p> |
|  <p>Vertex: _____ Sides: _____</p> |  <p>Vertex: _____ Sides: _____</p> |