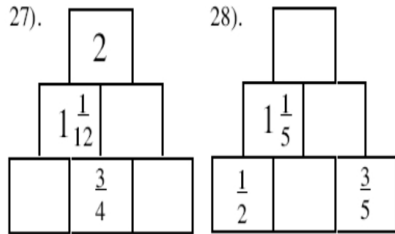
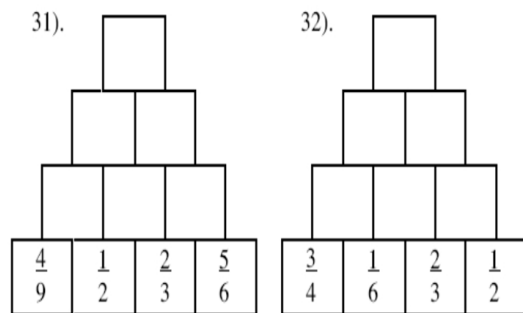
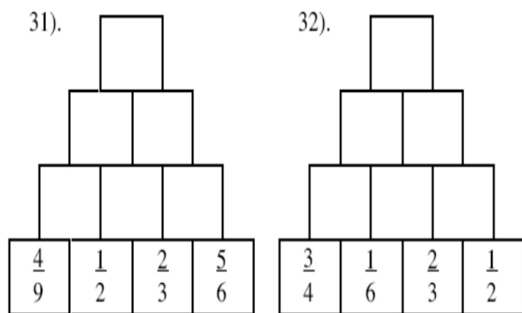
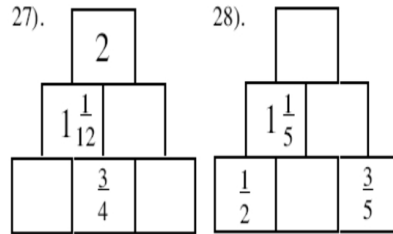


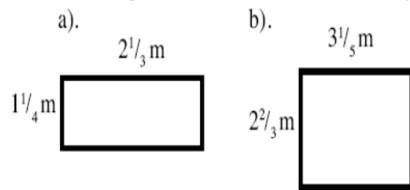
Complete these addition pyramids – find the fraction by adding the two blocks below. Write answers as simply as possible and using mixed numbers where appropriate



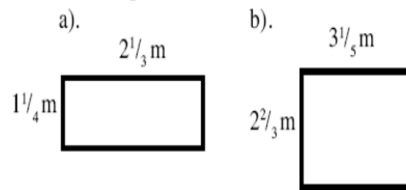
Complete these addition pyramids – find the fraction by adding the two blocks below. Write answers as simply as possible and using mixed numbers where appropriate



23). Find the perimeter for each of the following rectangles:



23). Find the perimeter for each of the following rectangles:



Complete the magic square.

Each row, column and diagonal adds up to the same magic number total.

Find the magic number total first and then missing fractions

	$\frac{3}{4}$	$\frac{11}{12}$
	$\frac{2}{3}$	
$\frac{5}{12}$		

Complete the magic square.

Each row, column and diagonal adds up to the same magic number total.

Find the magic number total first and then missing fractions

	$\frac{3}{4}$	$\frac{11}{12}$
	$\frac{2}{3}$	
$\frac{5}{12}$		