



Name: _____ Date: _____

ELAPSED TIME WORKSHEETS



Read the stories below. Calculate the elapsed time for each story. You can use the clocks to help you solve.

1. The movie started at 6:11 pm. It lasted 84 minutes. At what time did the movie finish?



_____ pm



2. Sam started his Zoom conversation with Nicole at 4:35 pm. They finally said goodbye at 8:22 pm. How long did the two friends speak?



_____ hours

_____ minutes

3. It takes Ferdy 47 minutes to get from his house to the store. If he wants to be at the store at 9:00 am, what time does Ferdy need to leave his house?



_____ am